

Name: _____


Date: _____

Reading and writing the time to o'clock

1: Which clock is showing 5 o'clock?



A



B

2: Which clock is showing 11 o'clock?




A



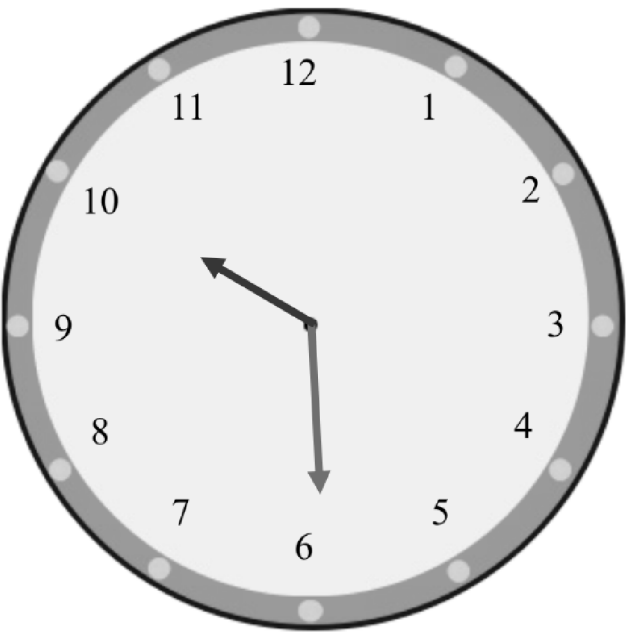
B

3: This clock face is showing 9 o'clock. True or False?



- ☐ True
- ☐ False

4: This clock face is showing 10 o'clock. True or False?



- ☐ True
- ☐ False



Last updated: Thursday, June 24, 2021 1:16 PM

