

Name: _____

Date: _____

Reading and writing the time to o'clock and half past

1: Which clock is showing a half past time?



A

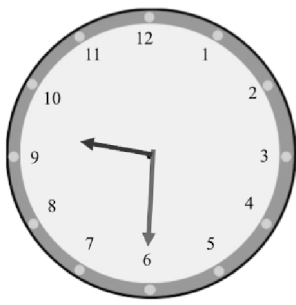
2: Which hand is the largest hand on the clock?

- ☐ The hour hand
- ☐ The minute hand



B

3: Which clock is showing half past 9?



A




B

☐ A

☐ B


4: True or false. This clock face is showing half past 4.



☐ True

☐ False

5: True or false. This clock face is showing half past 1.



☐ True

☐ False

Last updated: Thursday, June 24, 2021 1:16 PM

