

Reading and writing the time to o'clock and half past answer sheet

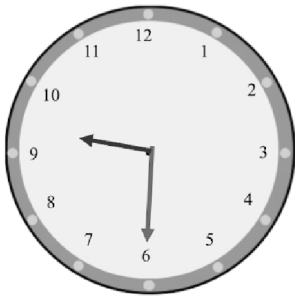
1: Which clock is showing a half past time?

Correct answer(s): B

2: Which hand is the largest hand on the clock?

Correct answer(s): The minute hand

3: Which clock is showing half past 9?




A



B


Correct answer(s): A

4: True or false. This clock face is showing half past 4.



Correct answer(s): True

5: True or false. This clock face is showing half past 1.



Correct answer(s): False

—

Last updated: Thursday, June 24, 2021 1:16 PM

